



Name: _____




January 26, 2018

- 1)  Find perimeter of square having each side (s) equals 70 ft


Answer: _____

- 2)  Find perimeter of square having each side (s) equals 79 ft


Answer: _____

- 3)  Find perimeter of square having each side (s) equals 28 m

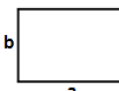
Answer: _____

- 4)  Find perimeter of triangle
a = 94 ft , b = 99 ft


Answer: _____

- 5)  Find perimeter of rectangle having sides a = 95 in and b = 70 in


Answer: _____

- 6)  Find perimeter of rectangle having sides a = 88 cm and b = 86 cm

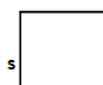
Answer: _____

- 7)  Find perimeter of square having each side (s) equals 62 m

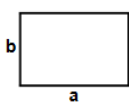
Answer: _____

- 8)  Find perimeter of triangle s = 95 in

Answer: _____

- 9)  Find perimeter of square having each side (s) equals 41 m

Answer: _____

- 10)  Find perimeter of rectangle having sides a = 99 cm and b = 98 cm

Answer: _____

Total: ____ / 10

Name: _____

January 26, 2018



Answers:

- | | | | | | | |
|----------|----------|-----------|----------|----------|----------|---------|
| 1) 280ft | 2) 316ft | 3) 112m | 4) 292ft | 5) 330in | 6) 348cm | 7) 248m |
| 8) 285in | 9) 164m | 10) 394cm | | | | |